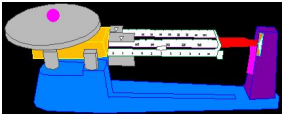

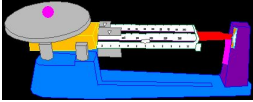





# WEIGHT NOTES

Name: \_\_\_\_\_  
 Date: \_\_\_\_\_  
 Period: \_\_\_\_\_

<h2 style="text-align: center;">Mass</h2>	<h2 style="text-align: center;">Weight</h2>
<p>A measure of how much _____ an object contains</p> 	<p>How much _____ is on an object</p> 
<p>Is _____ for an object no matter where it is located in the universe</p>	<p>_____ for an object depending on where it is located in the universe.</p>
<p>Measure with a _____</p> 	<p>Measure with a _____</p> 
<p>Earth mass _____ Moon mass              Mass=50kg      Mass=50kg</p> 	<p>Earth weight _____ Moon weight              Weight=490N      Weight=82N              (110 pounds)      (18 pounds)</p> 

--	--